

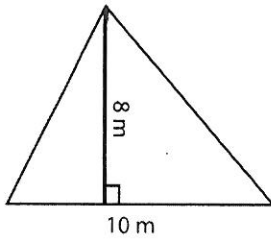
Name : \_\_\_\_\_

Score : \_\_\_\_\_

### Area - Mixed Shapes

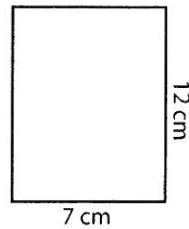
Find the area of each figure.

1)



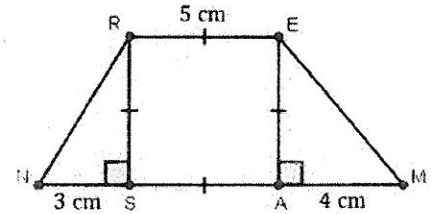
Area = \_\_\_\_\_

2)



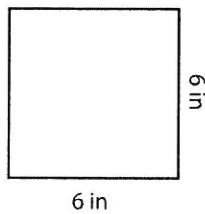
Area = \_\_\_\_\_

3)



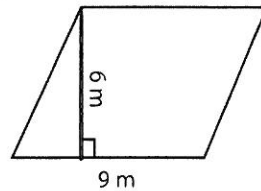
Composite shape Area = \_\_\_\_\_

4)



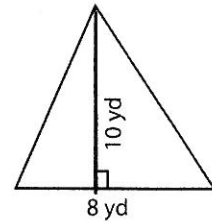
Area = \_\_\_\_\_

5)



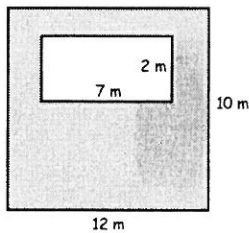
Area = \_\_\_\_\_

6)



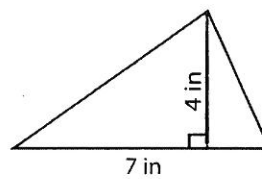
Area = \_\_\_\_\_

7)



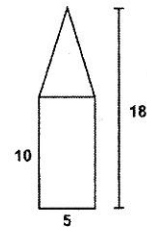
Shaded Area = \_\_\_\_\_

8)



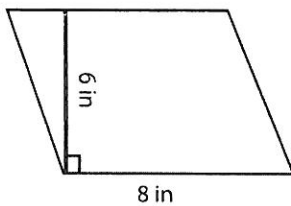
Area = \_\_\_\_\_

9)



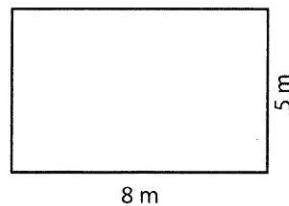
Composite Shape Area = \_\_\_\_\_

10)



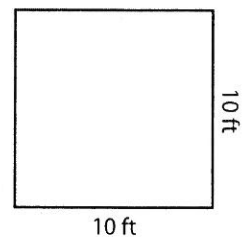
Area = \_\_\_\_\_

11)



Area = \_\_\_\_\_

12)



Area = \_\_\_\_\_