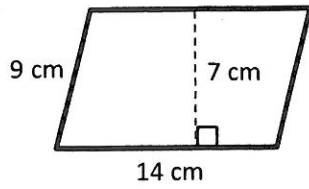


Finding Perimeter & Area

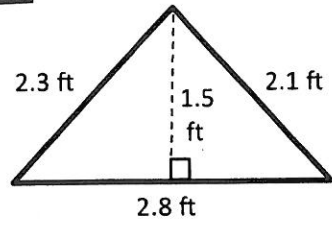
1.



P = _____

A = _____

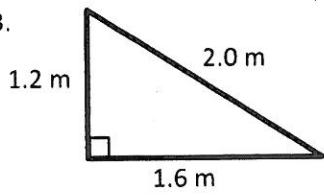
2.



P = _____

A = _____

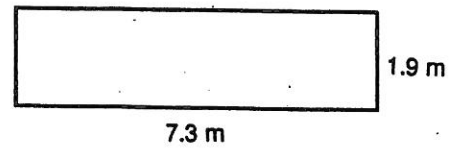
3.



P = _____

A = _____

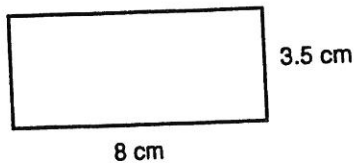
4.



P = _____

A = _____

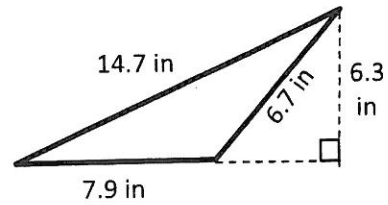
5.



P = _____

A = _____

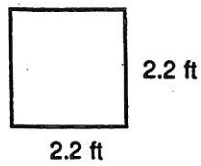
6.



P = _____

A = _____

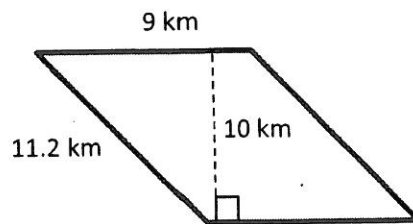
7.



P = _____

A = _____

8.



P = _____

A = _____