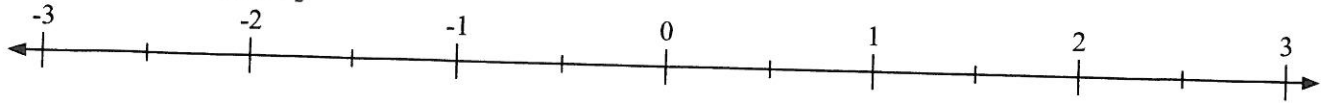


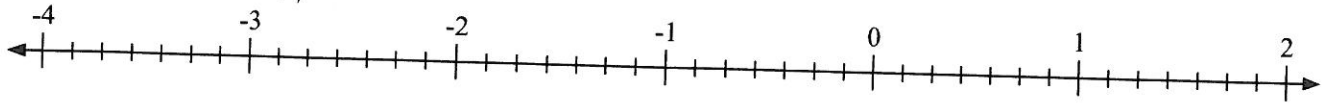


Mark each location described.

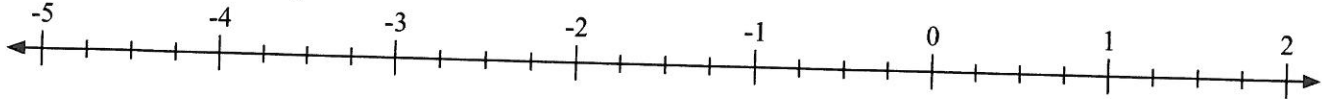
- 1) Mark the location of
- $-1\frac{1}{2}$



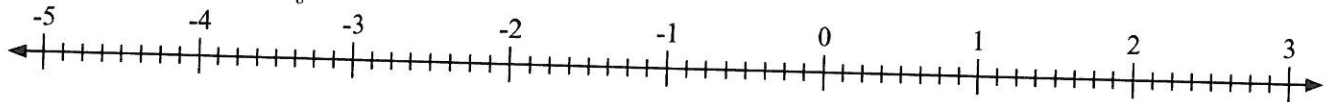
- 2) Mark the location of
- $-1\frac{1}{7}$



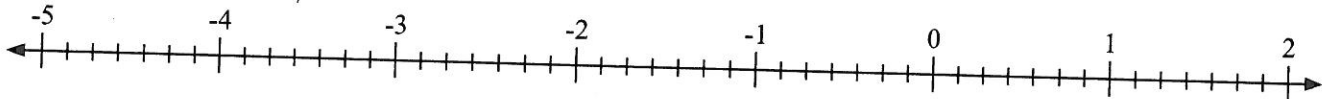
- 3) Mark the location of
- $-4\frac{1}{4}$



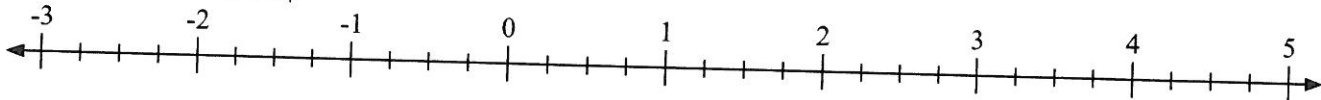
- 4) Mark the location of
- $-3\frac{6}{8}$



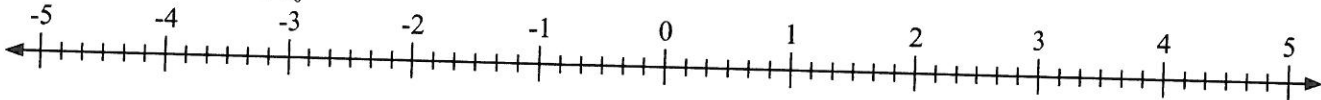
- 5) Mark the location of
- $-3\frac{5}{7}$



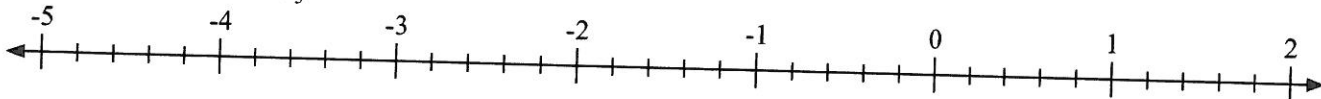
- 6) Mark the location of
- $0\frac{3}{4}$



- 7) Mark the location of
- $-2\frac{5}{6}$



- 8) Mark the location of
- $-1\frac{4}{5}$



- 9) Mark the location of
- $-2\frac{2}{3}$

