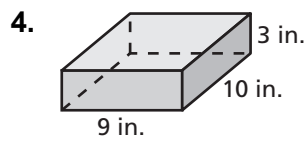
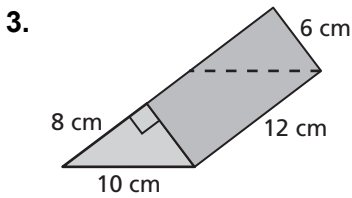
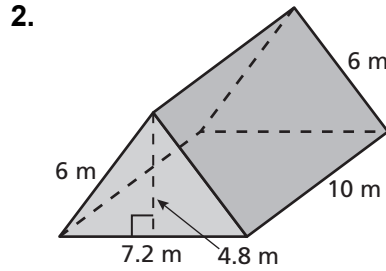
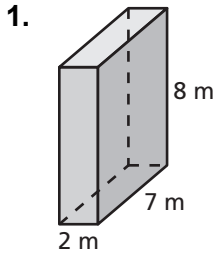


8.2

Practice

For use after Lesson 8.2

Find the surface area of the prism.



5. You buy a ring box as a birthday gift that is in the shape of a triangular prism. What is the least amount of wrapping paper needed to wrap the box?

