

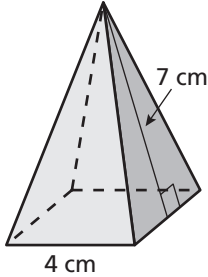
8.3

Practice

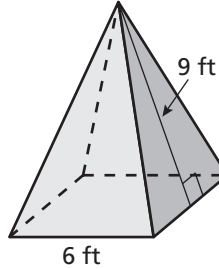
For use after Lesson 8.3

Find the surface area of the pyramid. The side lengths of the base are equal.

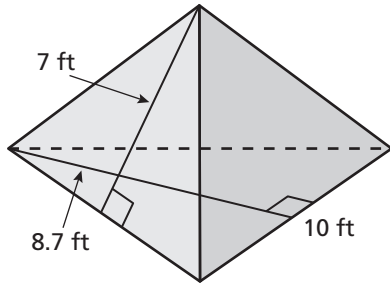
1.



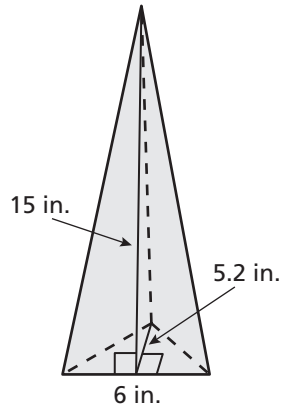
2.



3.



4.



5. A candle is shaped like a triangular pyramid. The side lengths of the base are equal. Find the surface area of the candle.

